




Thursday 26th March

Happy Thursday Bur Oaks

I've been taking part in the live Joe Wicks PE at 9am! Have you? If you have send me a picture of you taking part.

<https://www.youtube.com/user/thebodycoach1>

English	<p>What brilliant postcards you've all written – please make sure you look at your feedback on purple mash and make any necessary changes!</p> <p>Today I'd like you to become a diver – on purple mash in your '2Do' I have set a 'mashcam'. You are to take a picture of yourself and then imagine you have been diving somewhere along the Cornish coast. Next to your picture write a few comments, think about the following questions.</p> <p>How were you feeling? How are you feeling now? What did you see? Would you do it again?</p> <p>Make sure you are writing in full sentences, using the correct punctuation and CAPITAL letters when necessary.</p>  <p>Diver</p>
Maths	<p>Complete the money challenges attached below</p>
Spellings	<p>This week our spelling words are 'words based on common words' –</p> <p>Spelling GRAFFITI – our favourite</p> <p>Find a piece of scrap paper and make a poster, write each spelling word out in a different way</p> 
Geography	<p>Over the next two days I'd like you to go onto 'Espresso' and explore the 'Rivers' section under 'KS2 Geography'. Can you read the fact files, watch the videos and look at the images and then complete a couple the activities or all if you're feel confident.</p>  <p>Espresso (discovery education) username: student8171 password: reacher</p>
Reading	<p>Make sure you are reading at least half an hour everyday – you can now access 'Accelerated Reader' from home!</p> <p>Make sure you use the link on the school website -</p> <p>https://ukhosted40.renlearn.co.uk/2234842/Public/RPM/Login/Login.aspx?srcID=s</p>

Liam, Sarah and Amy buy lunch at a salad bar.

1.

salad bar			
Salads		Desserts	
cheese	£1.20	banana	25p
egg	90p	apple pie	50p
tuna	£1.60	yogurt	35p

Liam has £2.50 to spend.

He buys a tuna salad and an apple pie.

How much money has he got left?

Sarah buys a cheese salad and a yogurt.

Amy buys an egg salad.

How much **more** does Sarah pay than Amy?

2.

The children at Farmfield School are collecting money for charity.

Their target is to collect £360

So far they have collected £57.73

How much **more** money do they need to reach their target?

3. Challenge

Dan bought a packet of crisps and an ice cream.

The cost of both of them together is in one of the boxes below.

£1.85	75p	£1.74	£2.25	£1	£1.56
£2.10	80p	£1.80	£3.06	£1.44	£1.50
£1.60	£1.25	£1.20	90p	£1.45	£1.27

Use these clues to find out how much he paid:

1. You need more than three coins to make this amount.
2. There would be change when using the most valuable coin to buy them.
3. The crisps cost more than 50p.
4. You could pay without using any copper coins.
5. The ice cream costs exactly twice as much as the crisps.